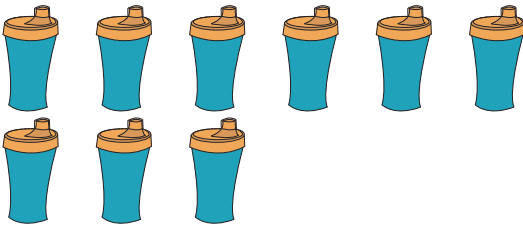




**Cross out & Count**

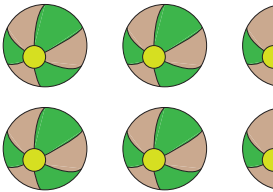
Subtraction within 10: S3

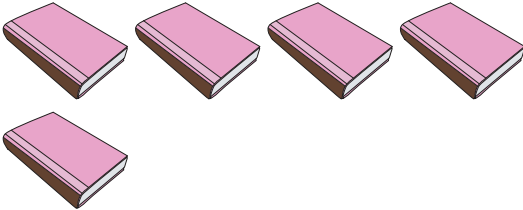
Complete the subtraction sentences that represent the picture models.


1)   
 $9 - 4 = \underline{\quad}$

2)   
 $3 - 2 = \underline{\quad}$

3)   
 $3 - 1 = \underline{\quad}$

5)   
 $10 - 7 = \underline{\quad}$

7)   
 $5 - 3 = \underline{\quad}$

8)   
 $8 - 1 = \underline{\quad}$


**PREVIEW**


Gain complete access to the largest collection of worksheets in all subjects!

Members, please log in to download this worksheet.

Not a member? Please sign up to gain complete access.

[www.mathworksheets4kids.com](http://www.mathworksheets4kids.com)

  
 $= \underline{\quad}$

  
 $= \underline{\quad}$