


## Cross out & Count

Subtraction within 20: S1

Complete the subtraction sentences that represent the picture models.



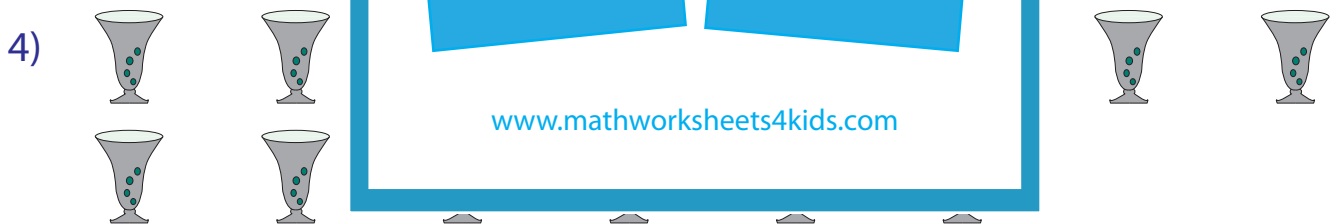
$$16 - 10 = \underline{\quad}$$



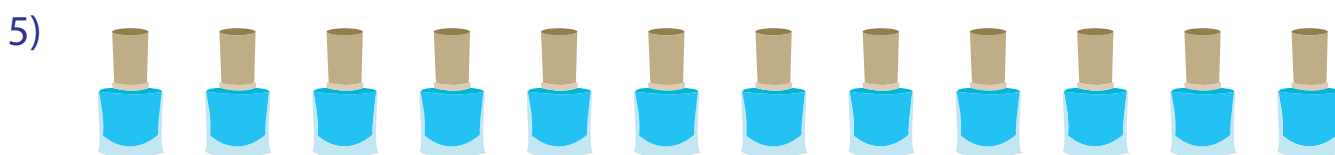
$$13 - 8 = \underline{\quad}$$



$$7 - 3 = \underline{\quad}$$



$$14 - 2 = \underline{\quad}$$



$$12 - 9 = \underline{\quad}$$

# PREVIEW

Gain complete access to the largest collection of worksheets in all subjects!

Members, please log in to download this worksheet.

Not a member? Please sign up to gain complete access.

www.mathworksheets4kids.com