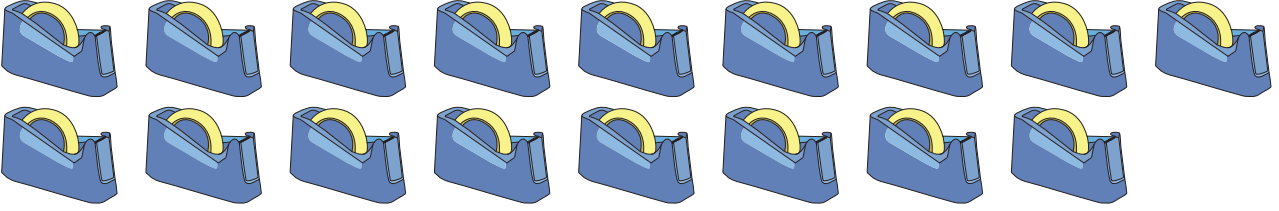



Cross out & Count

Subtraction within 20: S2

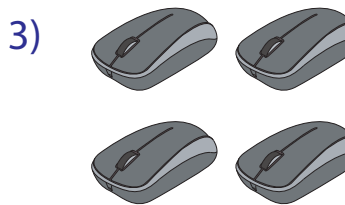
Complete the subtraction sentences that represent the picture models.

1) 


$$17 - 8 = \underline{\quad}$$




$$5 - 3 = \underline{\quad}$$



$$18 - 7 = \underline{\quad}$$



$$10 - 1 = \underline{\quad}$$



$$15 - 5 = \underline{\quad}$$

PREVIEW

Gain complete access to the largest collection of worksheets in all subjects!

Members, please log in to download this worksheet.

Not a member? Please sign up to gain complete access.

www.mathworksheets4kids.com