


# Cross out & Count

Subtraction within 10: S1

1) Cross out 9 light bulbs.




How many remain? \_\_\_\_\_

2) Cross out 2 caps.



How many are left? \_\_\_\_\_

3) Cross out 4 beets.



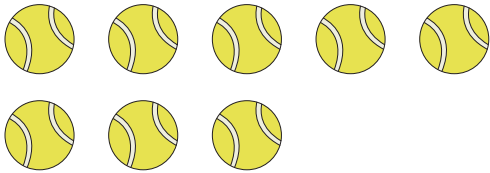
How many remain? \_\_\_\_\_

4) Cross out 1 donut.



How many are left? \_\_\_\_\_

5) Cross out 7 tennis balls.



How many remain? \_\_\_\_\_

6) Cross out 5 candles.




How many remain? \_\_\_\_\_

7) Cross out 1 butterfly.



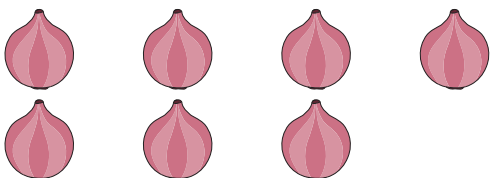
How many are left? \_\_\_\_\_

8) Cross out 4 tiaras.




How many are left? \_\_\_\_\_

9) Cross out 5 onions.



How many are left? \_\_\_\_\_

10) Cross out 2 rocking horses.



How many remain? \_\_\_\_\_