


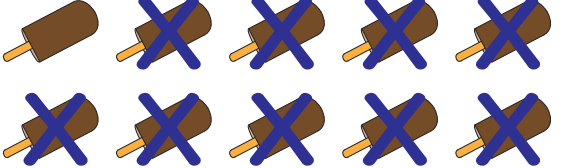
Picture Subtraction

Subtraction within 10: S3


Write the subtraction sentence to represent each picture model.

1) 

_____ - _____ = _____

2) 

_____ - _____ = _____

3) 

_____ - _____ = _____


PREVIEW

Gain complete access to the largest collection of worksheets in all subjects!


Members, please log in to download this worksheet.

Not a member? Please sign up to gain complete access.

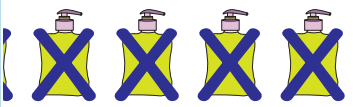
www.mathworksheets4kids.com




_____ - _____ = _____

5) 


_____ - _____ = _____



_____ - _____ = _____

7) 

_____ - _____ = _____

8) 

_____ - _____ = _____