



Picture Subtraction - MCQ

A) Observe each picture model and identify the correct subtraction sentence.

1)  a) $10 - 9 = 1$ b) $10 - 3 = 7$ c) $10 - 6 = 4$

2)  a) $7 - 6 = 1$ = 6

3)  a) $9 - 6 = 3$ = 4

4)  a) $6 - 4 = 2$ = 5


B) Choose the correct subtraction sentence.


1) $6 - 1 = 5$  


a)  

b)  c) 

3) $5 - 4 = 1$ 4) $7 - 6 = 1$

a)  a) 

b)  b) 

c)  c) 

PREVIEW

Gain complete access to the largest collection of worksheets in all subjects!

Members, please log in to download this worksheet.

Not a member? Please sign up to gain complete access.

www.mathworksheets4kids.com