


Subtraction Sentence

Subtraction within 10: S1

Write subtraction sentences based on the number of items displayed in each row.

1)



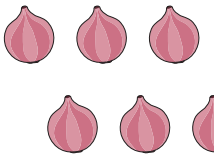
—



—


=

2)



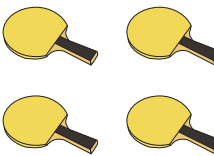
=

3)




=

4)



=

5)



—



—

=

PREVIEW

Gain complete access to the largest collection of worksheets in all subjects!

Members, please
log in to
download this
worksheet.

Not a member?
Please sign up to
gain complete
access.

www.mathworksheets4kids.com