


Subtraction Sentence

Subtraction within 10: S2

Write subtraction sentences based on the number of items displayed in each row.

1)



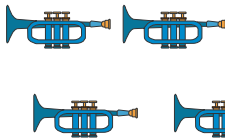
-



-

=

2)



PREVIEW

Gain complete access to the largest collection of worksheets in all subjects!

Members, please log in to download this worksheet.

Not a member? Please sign up to gain complete access.

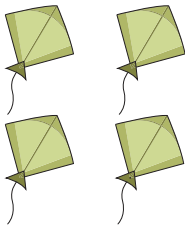
www.mathworksheets4kids.com

=

=

=


3)



4)



5)



-



-

=
