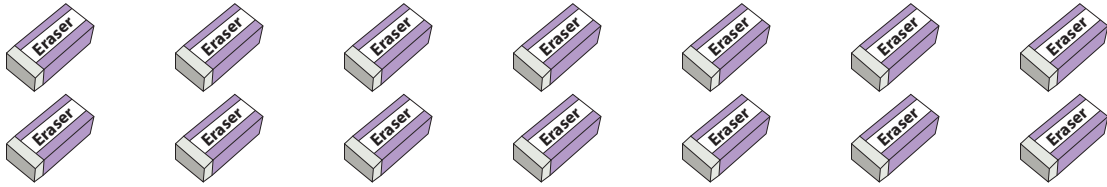


Picture Subtraction

Fact 1-10: S3

- 1) Cross out 7 erasers. How many are left?



$$14 - 7 = \underline{\quad}$$

- 2) Cross out 2 trumpets. How many are left?



$$7 - \quad = \quad$$

- 3) Cross out 4 mice



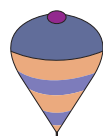
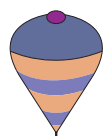
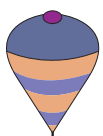
$$4 - \quad = \quad$$

- 4) Cross out 8 ducks



$$10 - 8 = \underline{\quad}$$

- 5) Cross out 5 spinning tops. How many are left?



$$6 - 5 = \underline{\quad}$$

PREVIEW

Gain complete access to the largest collection of worksheets in all subjects!

Members, please log in to download this worksheet.

Not a member? Please sign up to gain complete access.

www.mathworksheets4kids.com