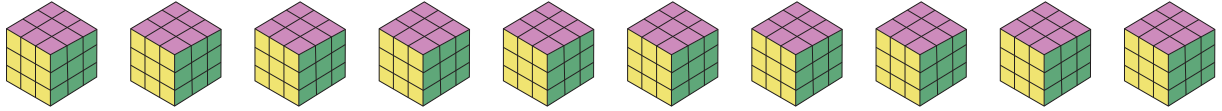


Picture Subtraction


Fact 1-5: S1

- 1) Cross out 5 Rubik's cubes. How many are left?




$$10 - 5 = \underline{\quad}$$

- 2) Cross out 2 Russian dolls. How many are left?



$$6 - 2 = \underline{\quad}$$

- 3) Cross out 1 toy.



$$3 - 1 = \underline{\quad}$$

- 4) Cross out 4 ice creams.



$$7 - 4 = \underline{\quad}$$

- 5) Cross out 3 whistles. How many are left?



$$9 - 3 = \underline{\quad}$$

PREVIEW

Gain complete access to the largest collection of worksheets in all subjects!

Members, please log in to download this worksheet.

Not a member? Please sign up to gain complete access.

www.mathworksheets4kids.com