

Picture Subtraction


Fact 1-5: S3

- 1) Cross out 1 pumpkin. How many are left?




$$7 - 1 = \underline{\quad}$$

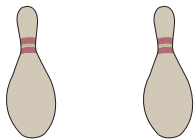
- 2) Cross out 3 ice-cream bars. How many are left?



$$10 - 3 = \underline{\quad}$$



- 3) Cross out 5 bowling pins.



$$8 - 5 = \underline{\quad}$$



- 4) Cross out 2 crabs.



$$2 - 2 = \underline{\quad}$$

- 5) Cross out 4 snack boxes. How many are left?



$$6 - 4 = \underline{\quad}$$

PREVIEW

Gain complete access to the largest collection of worksheets in all subjects!

Members, please log in to download this worksheet.

Not a member? Please sign up to gain complete access.

www.mathworksheets4kids.com