

Picture Subtraction

Fact2: S1

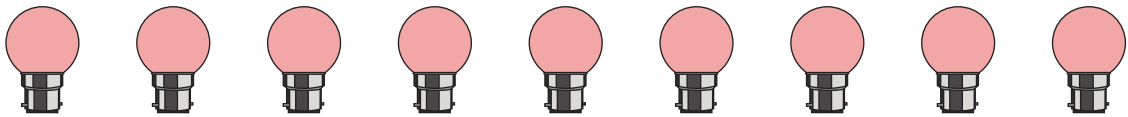
Cross out two items from each set given below. How many are left?

1)




$$7 - 2 = \underline{\quad}$$

2)




$$9 - 2 = \underline{\quad}$$

3)



$$5 - 2 = \underline{\quad}$$

4)



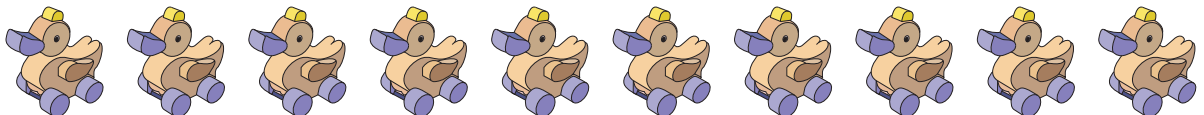
$$8 - 2 = \underline{\quad}$$

5)



$$4 - 2 = \underline{\quad}$$

6)



$$10 - 2 = \underline{\quad}$$