



## Picture Subtraction


Fact2: S2


Cross out two items from each set given below. How many are left?

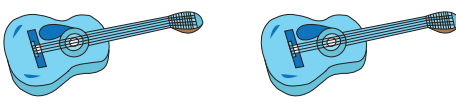
1)   
 $4 - 2 = \underline{\quad}$

2)   
 $6 - 2 = \underline{\quad}$

3)   
 $9 - 2 = \underline{\quad}$

4)   
 $3 - 2 = \underline{\quad}$

5)   
 $8 - 2 = \underline{\quad}$

6)   
 $2 - 2 = \underline{\quad}$

# PREVIEW

Gain complete access to the largest collection of worksheets in all subjects!

Members, please log in to download this worksheet.

Not a member? Please sign up to gain complete access.

[www.mathworksheets4kids.com](http://www.mathworksheets4kids.com)