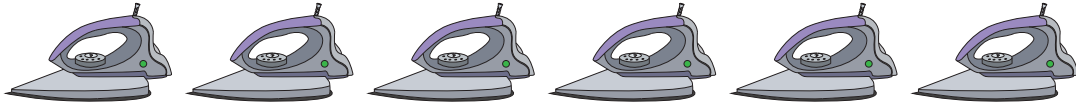


**Picture Subtraction**

Fact4: S1

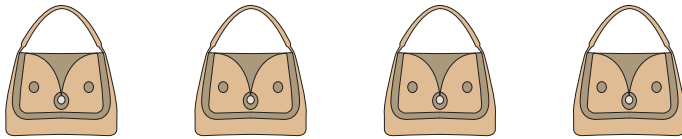
Cross out four items from each set given below. How many are left?

1)



$$6 - 4 = \underline{\quad}$$

2)



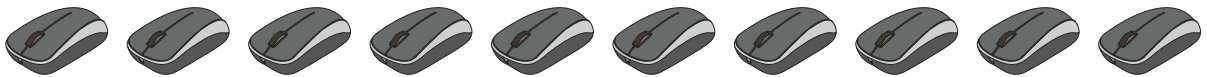
$$4 - 4 = \underline{\quad}$$

3)



$$7 - 4 = \underline{\quad}$$

4)



$$10 - 4 = \underline{\quad}$$

5)



$$5 - 4 = \underline{\quad}$$

6)



$$8 - 4 = \underline{\quad}$$