



Picture Subtraction


Fact4: S2


Cross out four items from each set given below. How many are left?


1) 
 $9 - 4 = \underline{\quad}$

2) 
 $6 - 4 = \underline{\quad}$

3) 
 $10 - 4 = \underline{\quad}$

4) 
 $4 - 4 = \underline{\quad}$

5) 
 $7 - 4 = \underline{\quad}$

6) 
 $5 - 4 = \underline{\quad}$

PREVIEW

Gain complete access to the largest collection of worksheets in all subjects!

Members, please log in to download this worksheet.

Not a member? Please sign up to gain complete access.

www.mathworksheets4kids.com