


Picture Subtraction

Fact5: S2

Cross out five items from each set given below. How many are left?

1)




$$6 - 5 = \underline{\quad}$$

2)



$$9 - 5 = \underline{\quad}$$

3)



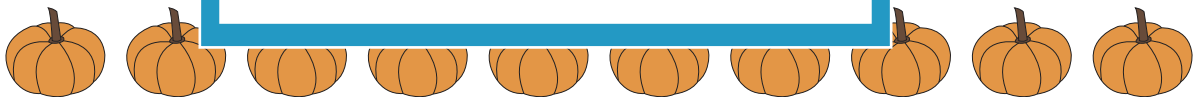
$$5 - 5 = \underline{\quad}$$

4)



$$7 - 5 = \underline{\quad}$$

5)



$$10 - 5 = \underline{\quad}$$

6)



$$8 - 5 = \underline{\quad}$$

PREVIEW

Gain complete access to the largest collection of worksheets in all subjects!

Members, please log in to download this worksheet.

Not a member? Please sign up to gain complete access.

www.mathworksheets4kids.com