


Picture Subtraction

Fact6: S1



Cross out six items from each set given below. How many are left?

1)



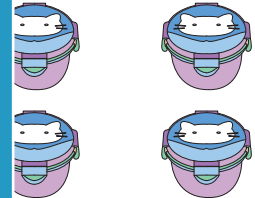
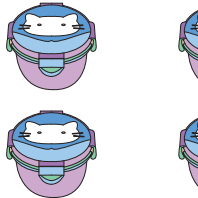
$$13 - 6 = \underline{\quad}$$

2)



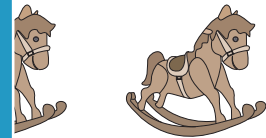
$$9 - \quad = \quad$$

3)



$$14 - \quad = \quad$$

4)



$$6 - 6 = \underline{\quad}$$

5)



$$10 - 6 = \underline{\quad}$$

PREVIEW

Gain complete access to the largest collection of worksheets in all subjects!

Members, please log in to download this worksheet.

Not a member? Please sign up to gain complete access.

www.mathworksheets4kids.com