


Picture Subtraction

Fact7: S1

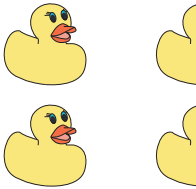
Cross out seven items from each set given below. How many are left?

1)



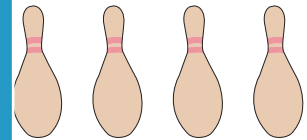
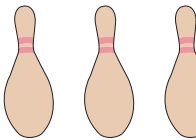
$$10 - 7 = \underline{\quad}$$

2)



$$13 -$$

3)



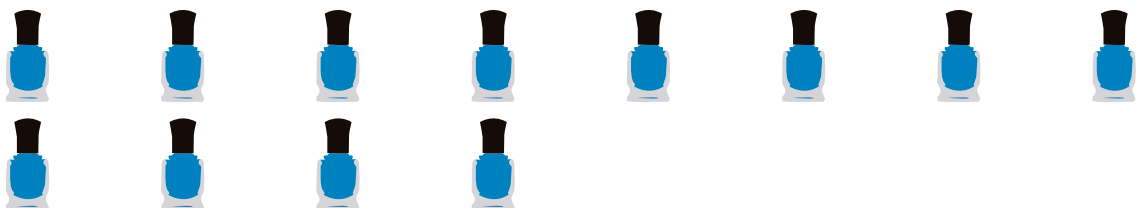
$$15 -$$

4)



$$8 - 7 = \underline{\quad}$$

5)



$$12 - 7 = \underline{\quad}$$

PREVIEW

Gain complete access to the largest collection of worksheets in all subjects!

Members, please log in to download this worksheet.

Not a member? Please sign up to gain complete access.

www.mathworksheets4kids.com