

Picture Subtraction

Fact8: S2


Cross out eight items from each set given below. How many are left?

1)




$$13 - 8 = \underline{\quad}$$

2)



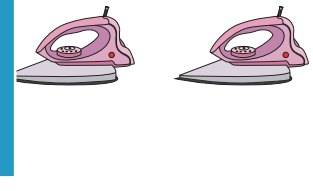
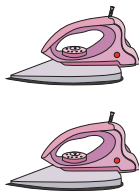
$$10 - \quad = \quad$$

3)



$$16 - \quad = \quad$$

4)



$$12 - 8 = \underline{\quad}$$

5)



$$9 - 8 = \underline{\quad}$$

PREVIEW

Gain complete access to the largest collection of worksheets in all subjects!

Members, please log in to download this worksheet.

Not a member? Please sign up to gain complete access.

www.mathworksheets4kids.com