

Name : \_\_\_\_\_

## Subtraction within 20


Sheet 3

- 1) There were 19 packs of dog food at a pet store. If 6 packs were found to be damaged, how many packs of dog food are in good condition?



\_\_\_\_\_

- 2) An ice-cream vendor had a stock of 16 ice-cream cones. If a customer bought 10 of them, how many cones remain?



\_\_\_\_\_

- 3) Ben caught 5 of 12

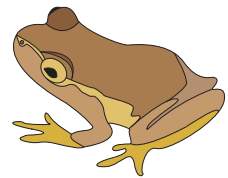
Gain complete access to the largest collection of worksheets in all subjects!

Members, please log in to download this worksheet.

Not a member? Please sign up to gain complete access.

[www.mathworksheets4kids.com](http://www.mathworksheets4kids.com)

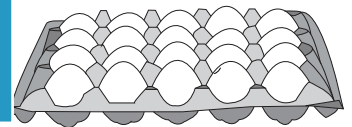
- many frogs escaped?



\_\_\_\_\_


- 4) Smith collected 12 eggs for breakfast for his family. If 8 eggs can be found broken, how many eggs are good?

- them to make w many



\_\_\_\_\_

- 5) Elsa had 17 sticks of cotton candy on sale at the fair. If she managed to sell 7 of them, how many sticks remain unsold?



\_\_\_\_\_