


Name : _____



Surface Area - Counting Squares

 = 1 yd²

Draw a rectangular prism for each set of dimensions, and find its surface area.

1) $l = 3$ yd, $w = 2$ yd, $h = 3$ yd

2) $l = 3$ yd, $w = 3$ yd, $h = 4$ yd



Surface Area = _____

PREVIEW

Gain complete access to the largest collection of worksheets in all subjects!



Members, please log in to download this worksheet.

Not a member? Please sign up to gain complete access.

www.mathworksheets4kids.com

3) $l = 4$ yd, $w = 3$ yd, $h = 1$ yd



_____ yd, $h = 1$ yd



Surface Area = _____

5) $l = 2$ yd, $w = 2$ yd, $h = 2$ yd

_____ yd, $h = 2$ yd



Surface Area = _____

Surface Area = _____