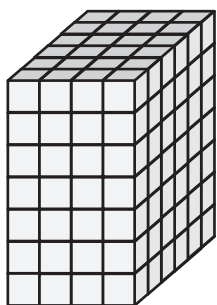


Name : _____

Surface Area - Counting Squares

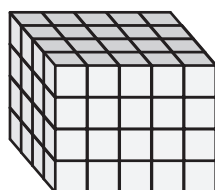
Count the unit squares and find the surface area of each rectangular prism.

1) $\square = 3 \text{ ft}^2$

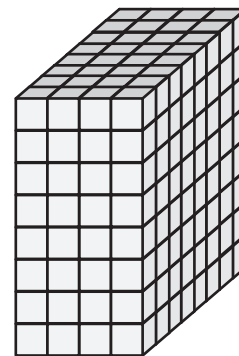


Surface Area = _____

2) $\square = 4 \text{ in}^2$

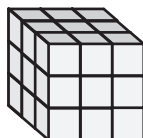


3) $\square = 5 \text{ yd}^2$



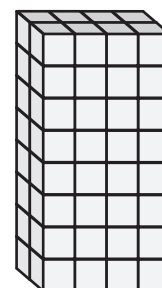
Surface Area = _____

4) $\square = 7 \text{ yd}^2$




Surface Area = _____

5) $\square = 8 \text{ in}^2$

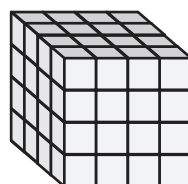


Surface Area = _____

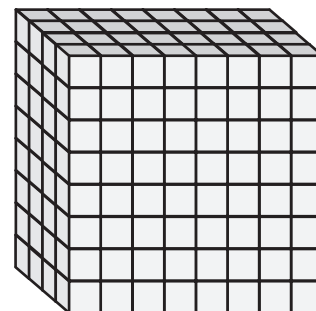
7) $\square = 2 \text{ in}^2$



Surface Area = _____



Surface Area = _____



Surface Area = _____

PREVIEW

Gain complete access to the largest collection of worksheets in all subjects!

Members, please log in to download this worksheet.

Not a member? Please sign up to gain complete access.

www.mathworksheets4kids.com