


Name : _____

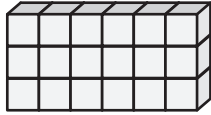
Surface Area - Counting Squares

ES1

Find the surface area of each rectangular prism.


 = 1 ft²

1)




Surface Area = _____

2)




Surface Area = _____

3)



Surface Area = _____

4)



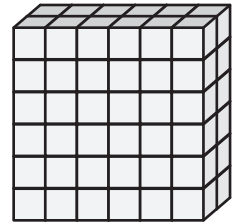
Surface Area = _____

5)



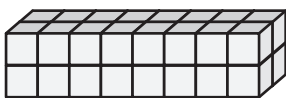
Surface Area = _____

6)




Surface Area = _____

7)



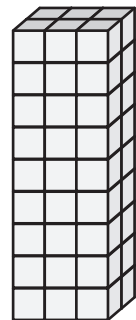
Surface Area = _____

8)



Surface Area = _____

9)



Surface Area = _____