

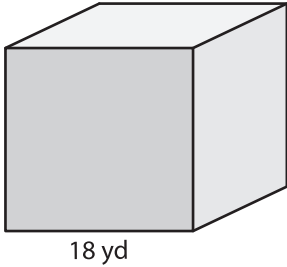
Name : _____

Surface Area - Cube

ES2

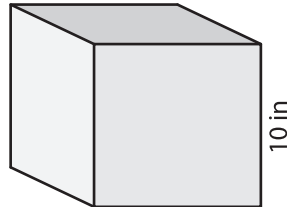
Find the surface area of each cube.

1)



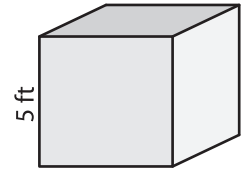
surface area = _____

2)



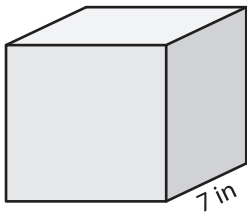
surface area = _____

3)



surface area = _____

4)



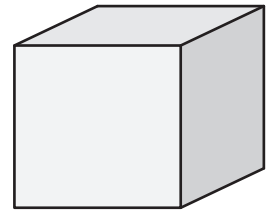
surface area = _____

PREVIEW
Gain complete access to the largest collection of worksheets in all subjects!

Members, please log in to download this worksheet.

Not a member? Please sign up to gain complete access.

www.mathworksheets4kids.com



surface area = _____

7) The side length of a cube is _____

8) Find the surface area of the cube, if its side length is 16 yards.