

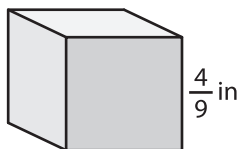
Name : _____

Surface Area - Cube

Sheet 3

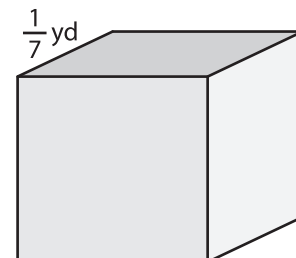
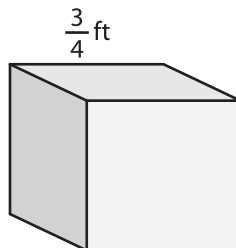
Find the surface area of each cube.

1)



surface area = _____

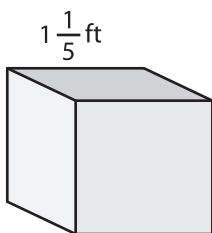
2)



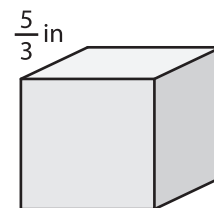
3)

surface area = _____

4)



surface area = _____



surface area = _____

PREVIEW

Gain complete access to the largest collection of worksheets in all subjects!

Members, please log in to download this worksheet.

Not a member? Please sign up to gain complete access.

www.mathworksheets4kids.com

7) If the side length of the cube is _____

8) Find the surface area of the cube whose side length is $\frac{7}{6}$ feet.
