

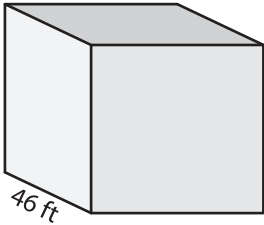
Name : _____

Surface Area - Cube

MS2

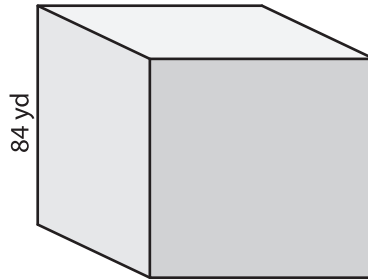
Find the surface area of each cube.

1)

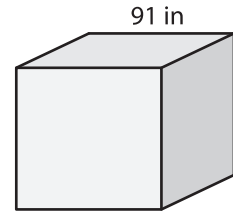


surface area = _____

2)

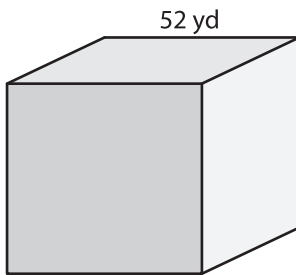


3)



surface area = _____

4)



surface area = _____

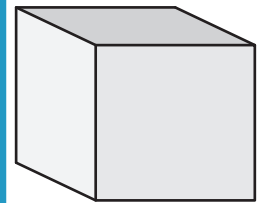
PREVIEW

Gain complete access to the largest collection of worksheets in all subjects!

Members, please log in to download this worksheet.

Not a member? Please sign up to gain complete access.

www.mathworksheets4kids.com



surface area = _____

7) If the side length of the cube is _____

8) Find the surface area of the cube whose side length is 65 yards.
