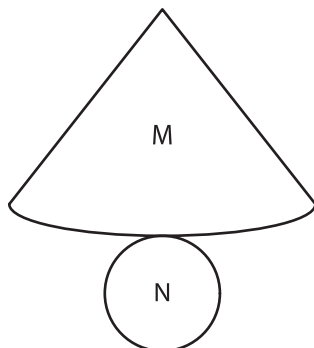
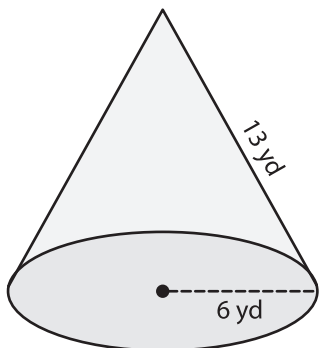


Surface Area of Solids using Nets

Using the net of each solid shape, find its surface area. (use $\pi = 3.14$)

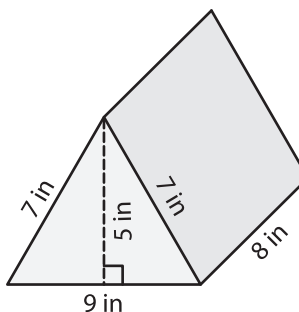
1)



Area of M = _____

Area of N = _____

2)



PREVIEW

Gain complete access to the largest collection of worksheets in all subjects!

Members, please log in to download this worksheet.

Not a member? Please sign up to gain complete access.

www.mathworksheets4kids.com

Area = _____

Area of A = _____

Area of B = _____

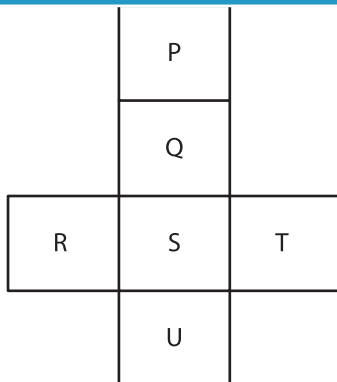
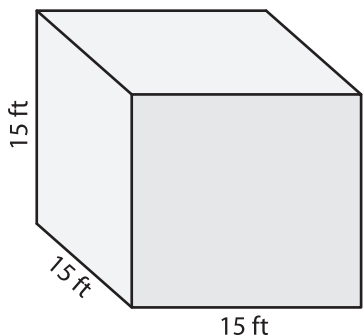
Area of C = _____

Area of D = _____

Area of E = _____

Area = _____

3)



Area of Q = _____

Area of R = _____

Area of S = _____

Area of T = _____

Area of U = _____

Surface Area = _____