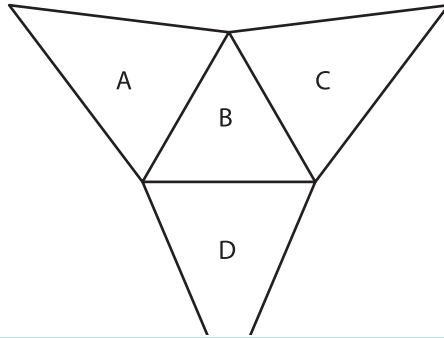
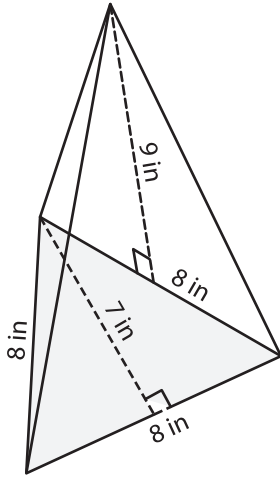


Surface Area of Solids using Nets

Using the net of each solid shape, find its surface area. (use $\pi = 3.14$)

1)



Area of A = _____

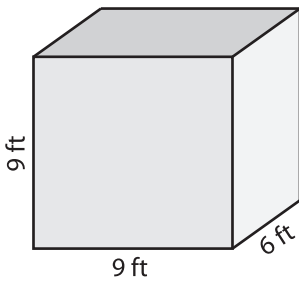
Area of B = _____

Area of C = _____

Area of D = _____

Area = _____

2)



PREVIEW
Gain complete access to the largest collection of worksheets in all subjects!

Members, please log in to download this worksheet.

Not a member? Please sign up to gain complete access.

www.mathworksheets4kids.com

Area of S = _____

Area of T = _____

Area of U = _____

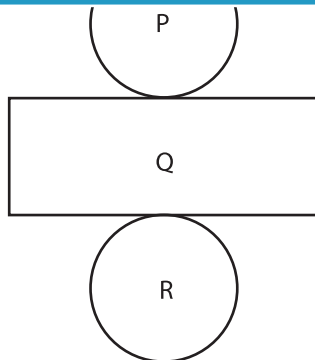
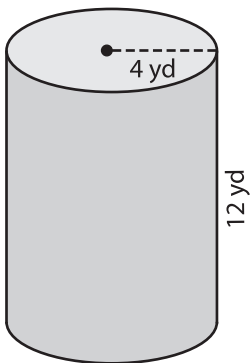
Area of V = _____

Area of W = _____

Area of X = _____

Area = _____

3)



Area of P = _____

Area of Q = _____

Area of R = _____

Surface Area = _____