

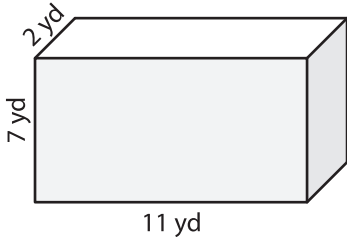
Name : _____

Integers: ES3

Surface Area - Rectangular Prism

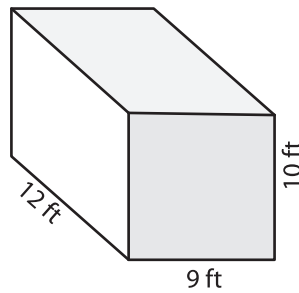
Find the surface area of each rectangular prism.

1)



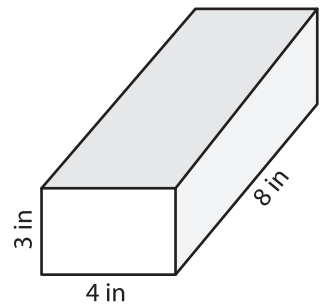
Surface Area = _____

2)



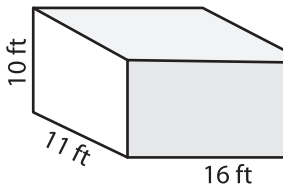
Surface Area = _____

3)

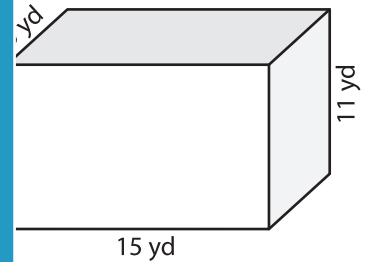


Surface Area = _____

4)

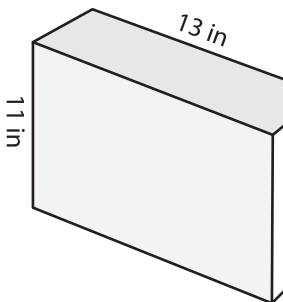


Surface Area = _____



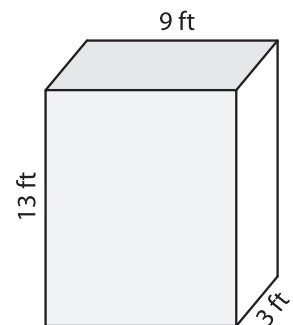
Surface Area = _____

7)



Surface Area = _____

Surface Area = _____



Surface Area = _____

PREVIEW

Gain complete access to the largest collection of worksheets in all subjects!

Members, please log in to download this worksheet.

Not a member? Please sign up to gain complete access.

www.mathworksheets4kids.com

10) A rectangular-shaped portable speaker has dimensions of 6 inches, 5 inches, and 8 inches. What is the surface area of the speaker?

Surface Area = _____