

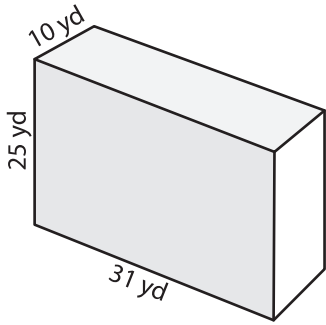
Name : \_\_\_\_\_

## Surface Area - Rectangular Prism

Integers: MS1

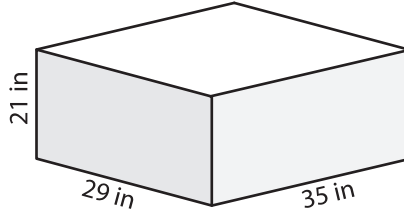
Find the surface area of each rectangular prism.

1)



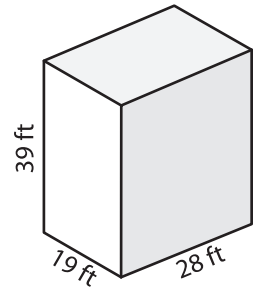
Surface Area = \_\_\_\_\_

2)



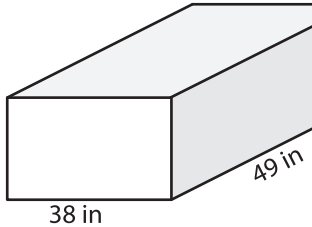
Surface Area = \_\_\_\_\_

3)

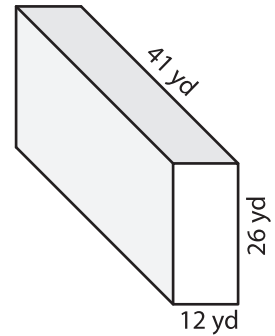


Surface Area = \_\_\_\_\_

4)

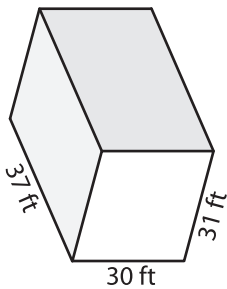


Surface Area = \_\_\_\_\_



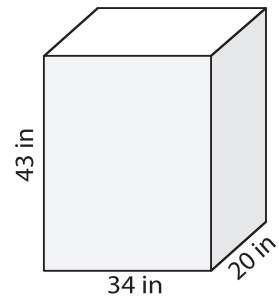
Surface Area = \_\_\_\_\_

7)



Surface Area = \_\_\_\_\_

Surface Area = \_\_\_\_\_



Surface Area = \_\_\_\_\_

# PREVIEW

Gain complete access to the largest collection of worksheets in all subjects!

Members, please log in to download this worksheet.

Not a member? Please sign up to gain complete access.

[www.mathworksheets4kids.com](http://www.mathworksheets4kids.com)

- 10) Carrie uses an empty cereal box to make a craft and covers the box with green construction paper. If the dimensions of the box are 12 inches, 8 inches, and 2 inches, how much paper is required?

Construction paper needed: \_\_\_\_\_