

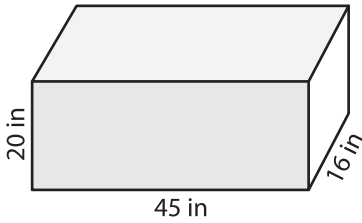
Name : \_\_\_\_\_

## Surface Area - Rectangular Prism

Integers: MS2

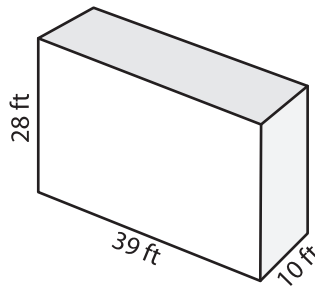
Find the surface area of each rectangular prism.

1)



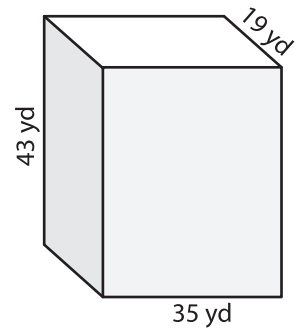
Surface Area = \_\_\_\_\_

2)



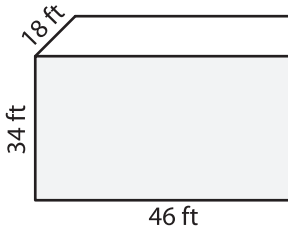
Surface Area = \_\_\_\_\_

3)



Surface Area = \_\_\_\_\_

4)



Surface Area = \_\_\_\_\_

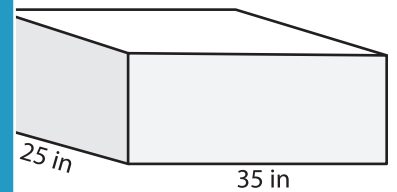
**PREVIEW**

Gain complete access to the largest collection of worksheets in all subjects!

Members, please log in to download this worksheet.

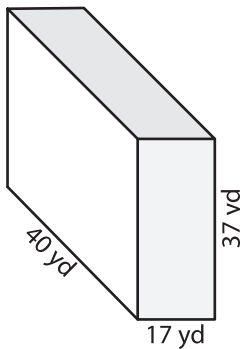
Not a member? Please sign up to gain complete access.

[www.mathworksheets4kids.com](http://www.mathworksheets4kids.com)



Surface Area = \_\_\_\_\_

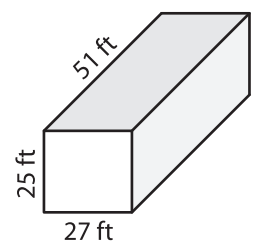
7)



Surface Area = \_\_\_\_\_

Surface Area = \_\_\_\_\_

Surface Area = \_\_\_\_\_



- 10) A small box of chocolates in the shape of a rectangular prism is 6 inches long, 3 inches wide, and 4 inches tall. If a box is wrapped with foil paper, find how much foil paper is needed to wrap the box?

Foil paper needed: \_\_\_\_\_