

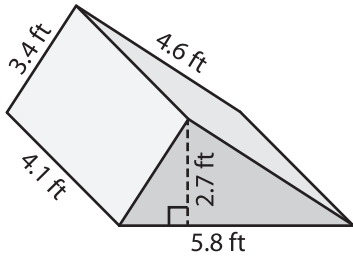
Name : \_\_\_\_\_

Decimals: S1

# Surface Area - Triangular Prisms

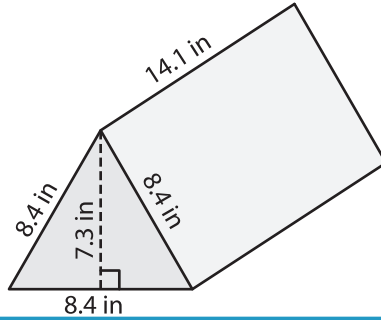
Find the surface area of each triangular prism.

1)



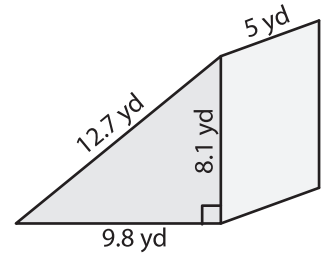
Surface Area = \_\_\_\_\_

2)

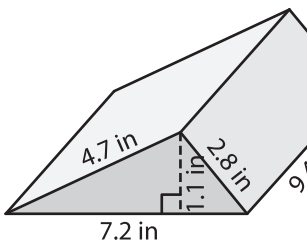


Surface Area = \_\_\_\_\_

3)



4)



Surface Area = \_\_\_\_\_

**PREVIEW**

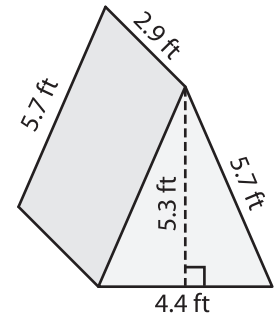
Gain complete access to the largest collection of worksheets in all subjects!

Members, please log in to download this worksheet.

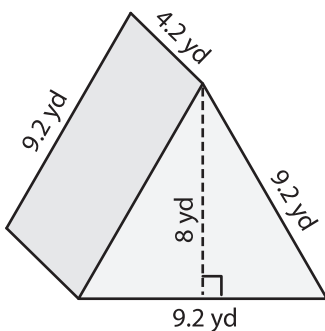
Not a member? Please sign up to gain complete access.

[www.mathworksheets4kids.com](http://www.mathworksheets4kids.com)

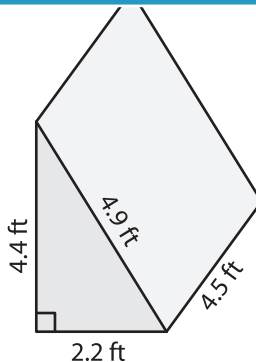
Surface Area = \_\_\_\_\_



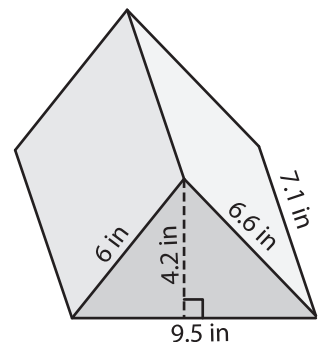
7)



Surface Area = \_\_\_\_\_



Surface Area = \_\_\_\_\_



Surface Area = \_\_\_\_\_