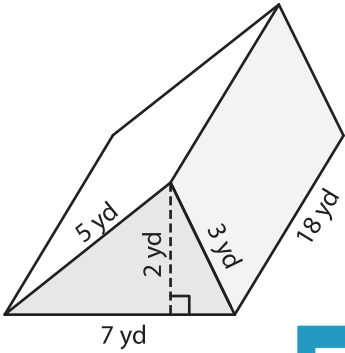


Surface Area of Triangular Prisms

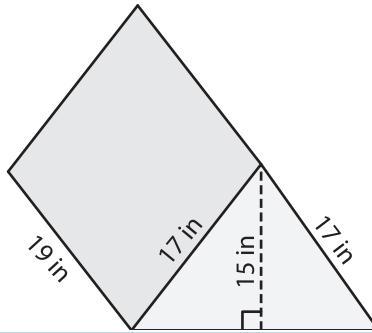
Find the surface area of each triangular prism.

1)



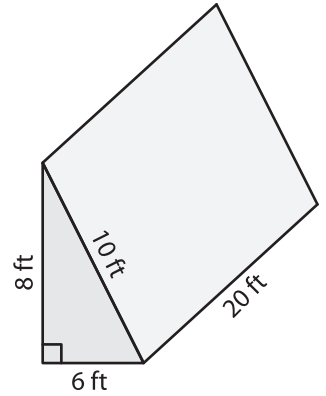
Surface Area = _____

2)

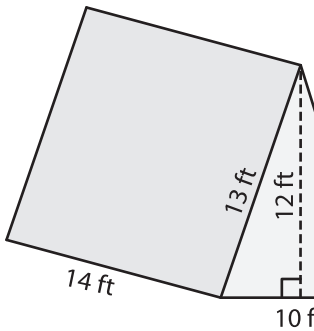


Surface Area = _____

3)



4)



Surface Area = _____

PREVIEW
Gain complete access to the largest collection of worksheets in all subjects!

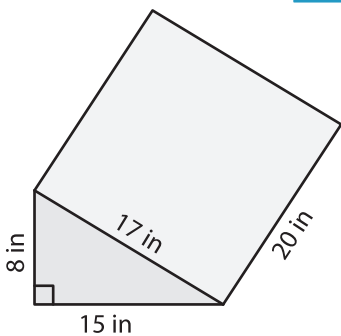
Members, please log in to download this worksheet.

Not a member? Please sign up to gain complete access.

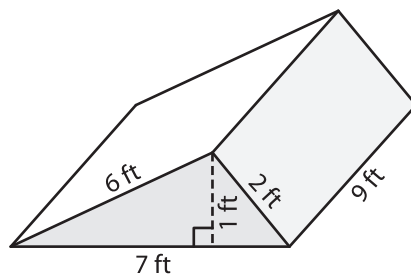
www.mathworksheets4kids.com

Surface Area = _____

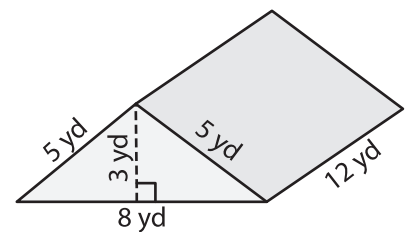
7)



Surface Area = _____



Surface Area = _____



Surface Area = _____