


Lines of Symmetry

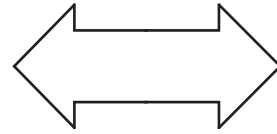
Sheet 1

Draw lines of symmetry on each shape. Count and write the lines of symmetry you see.

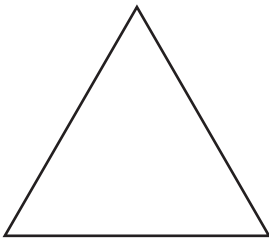
1)




2)



3)



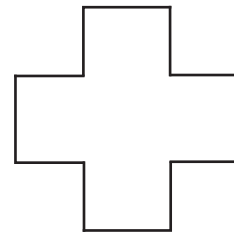
4)




5)



6)



7)



8)

