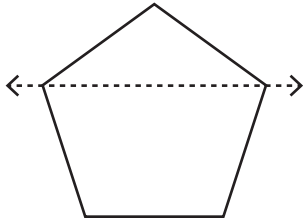


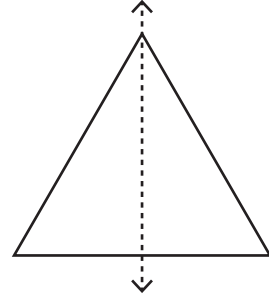
**Recognize the line of symmetry**

Is the dotted line on each shape a line of symmetry? Write yes or no.

1)



2)



3)



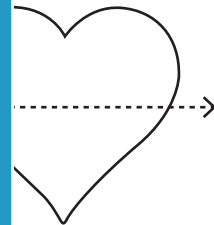
**PREVIEW**

Gain complete access to the largest  
collection of worksheets in all subjects!

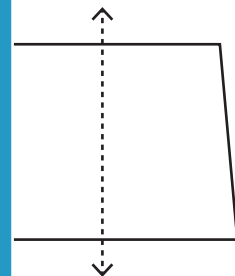
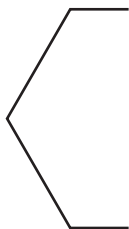
Members, please  
log in to  
download this  
worksheet.

Not a member?  
Please sign up to  
gain complete  
access.

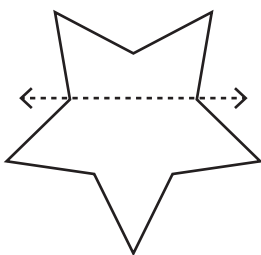
[www.mathworksheets4kids.com](http://www.mathworksheets4kids.com)



5)

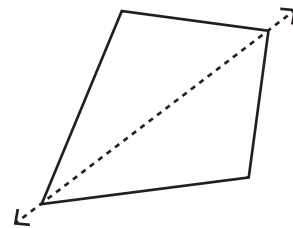


7)



\_\_\_\_\_

8)



\_\_\_\_\_