
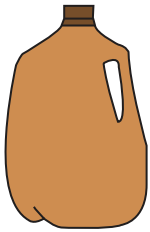



Tall vs Short

Write 1 to 3 to show the order from tallest to shortest objects.

1)



2)



PREVIEW

Gain complete access to the largest collection of worksheets in all subjects!


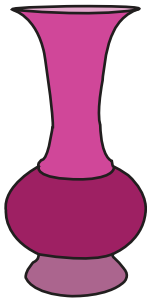
Members, please log in to download this worksheet.

Not a member? Please sign up to gain complete access.

www.mathworksheets4kids.com

Write 1 to 3 to show

3)



4)

