


Name : _____

Tally-Pond Animals

Sheet 3

Draw tally marks to show the number of pond animals in each kind and answer the questions.






PREVIEW

Gain complete access to the largest collection of worksheets in all subjects!

Members, please log in to download this worksheet.

Not a member? Please sign up to gain complete access.

www.mathworksheets4kids.com

Pond A




KS

- 1) How many more _____
- 2) Which kind is the most in number? _____
- 3) How many fewer ducks than frogs? _____
- 4) How many pond animals are there? _____