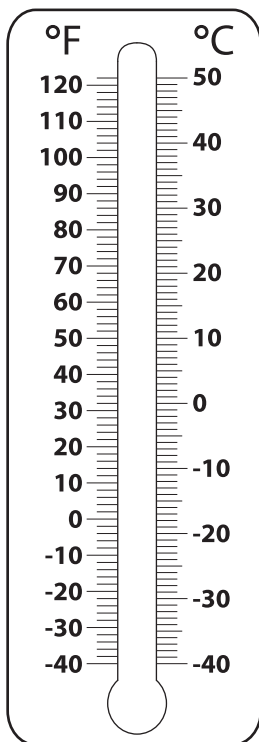


# Converting from Celsius to Fahrenheit

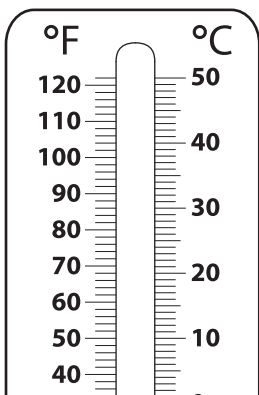
Color to depict the temperature on each thermometer, and write its equivalent in °F.

1)  $-25\text{ }^{\circ}\text{C}$

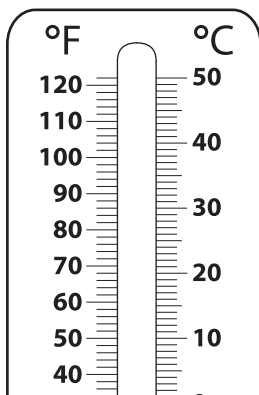


$-25\text{ }^{\circ}\text{C} = \underline{\hspace{2cm}}\text{ }^{\circ}\text{F}$

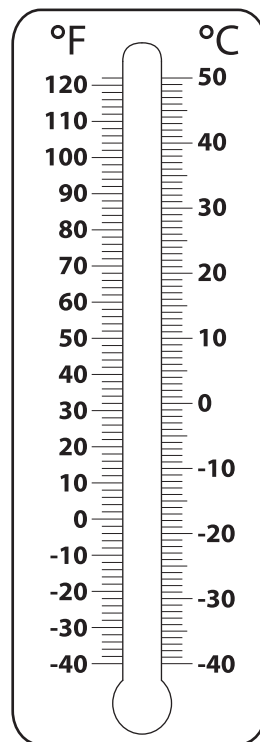
2)  $0\text{ }^{\circ}\text{C}$



3)  $-40\text{ }^{\circ}\text{C}$

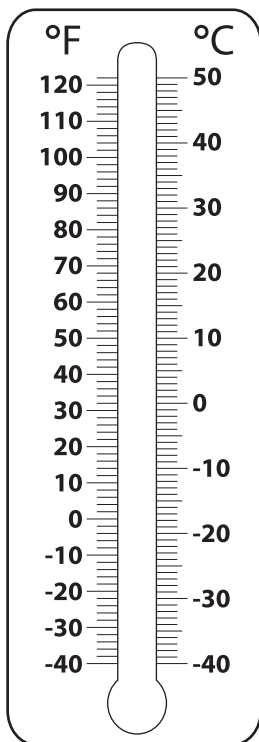


4)  $50\text{ }^{\circ}\text{C}$



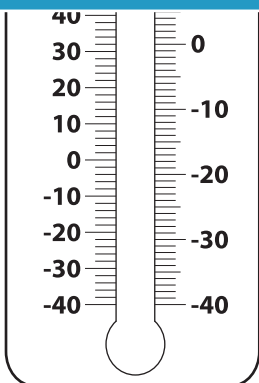
$50\text{ }^{\circ}\text{C} = \underline{\hspace{2cm}}\text{ }^{\circ}\text{F}$

5)  $30\text{ }^{\circ}\text{C}$



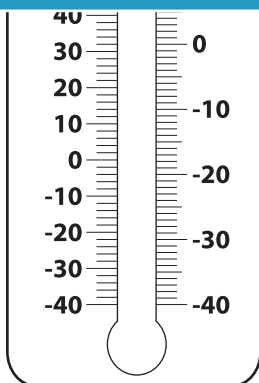
$30\text{ }^{\circ}\text{C} = \underline{\hspace{2cm}}\text{ }^{\circ}\text{F}$

6)  $5\text{ }^{\circ}\text{C}$



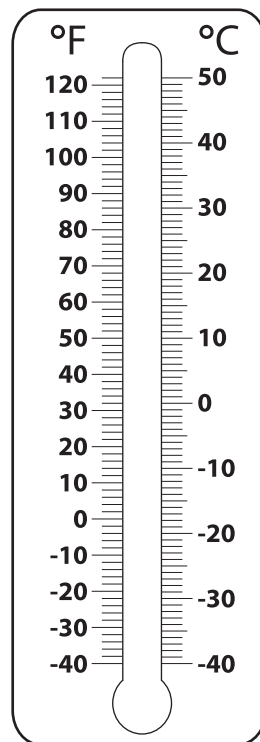
$5\text{ }^{\circ}\text{C} = \underline{\hspace{2cm}}\text{ }^{\circ}\text{F}$

7)  $20\text{ }^{\circ}\text{C}$



$20\text{ }^{\circ}\text{C} = \underline{\hspace{2cm}}\text{ }^{\circ}\text{F}$

8)  $-35\text{ }^{\circ}\text{C}$



$-35\text{ }^{\circ}\text{C} = \underline{\hspace{2cm}}\text{ }^{\circ}\text{F}$

**PREVIEW**

Gain complete access to the largest collection of worksheets in all subjects!

Members, please log in to download this worksheet.

Not a member? Please sign up to gain complete access.

[www.mathworksheets4kids.com](http://www.mathworksheets4kids.com)