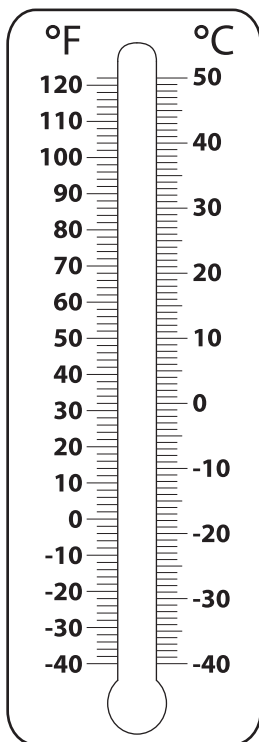


Converting from Celsius to Fahrenheit

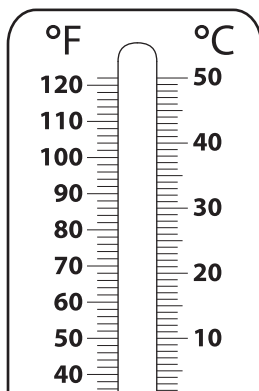
Color to depict the temperature on each thermometer, and write its equivalent in °F.

1) 40 °C

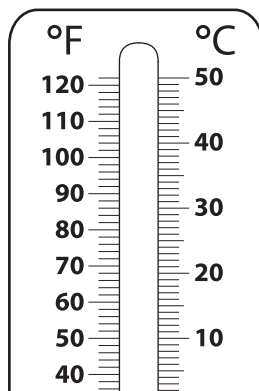


40 °C = _____ °F

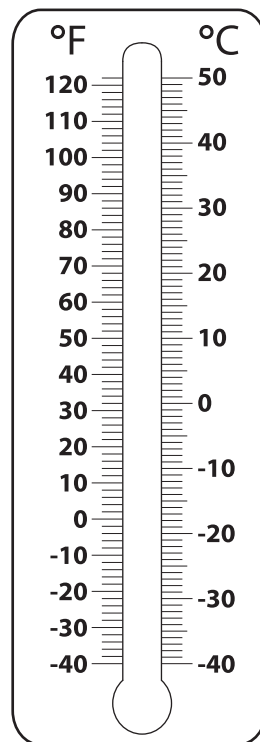
2) -15 °C



3) 35 °C

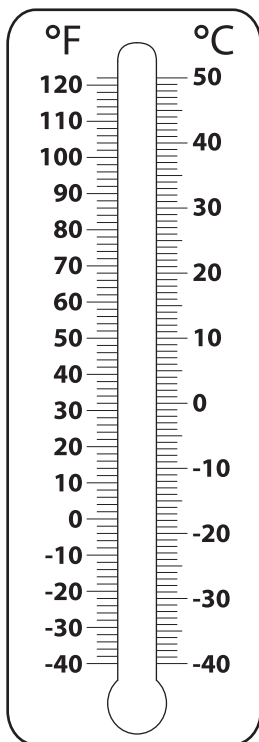


4) -20 °C



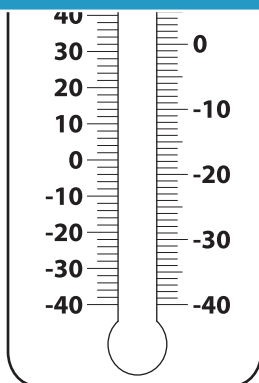
-20 °C = _____ °F

5) -25 °C



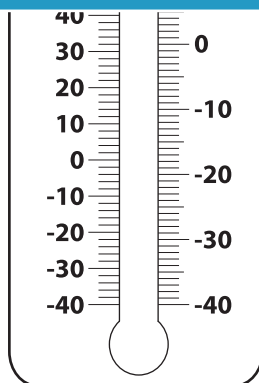
-25 °C = _____ °F

6)



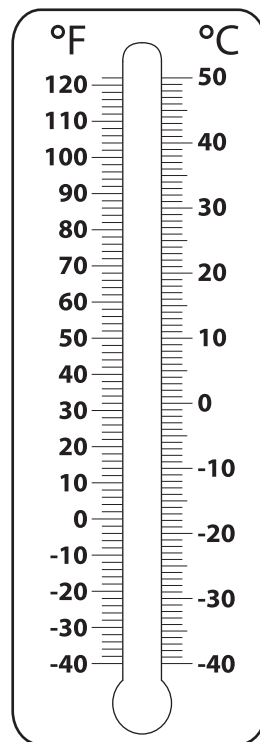
45 °C = _____ °F

Not a member?
Please sign up to
gain complete
access.



-30 °C = _____ °F

8) 10 °C



10 °C = _____ °F

PREVIEW

Gain complete access to the largest
collection of worksheets in all subjects!

Members, please
log in to
download this
worksheet.

Not a member?
Please sign up to
gain complete
access.

www.mathworksheets4kids.com