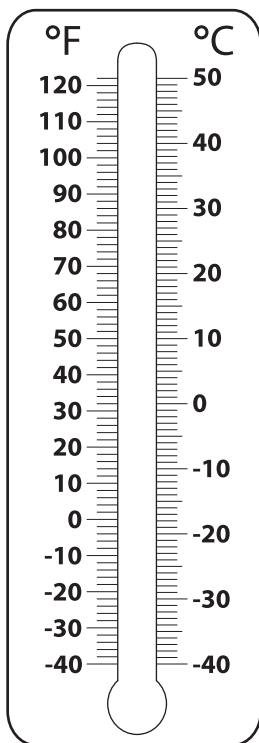


Converting from Fahrenheit to Celsius

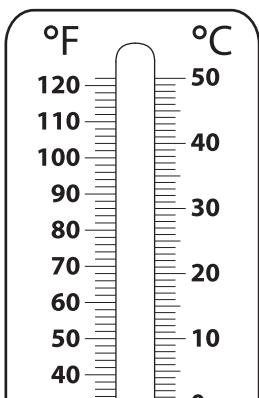
Color to depict the temperature on each thermometer, and write its equivalent in °C.

1) 77 °F

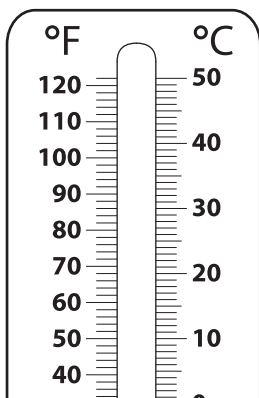


77 °F = _____ °C

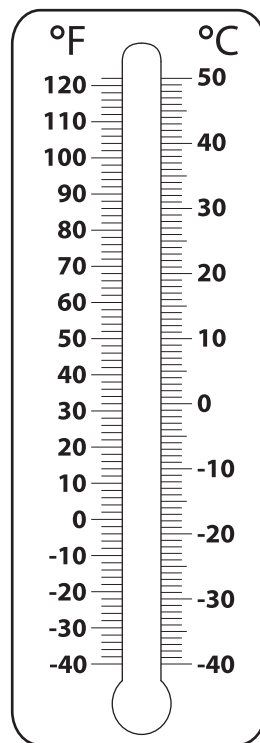
2) -22 °F



3) 23 °F

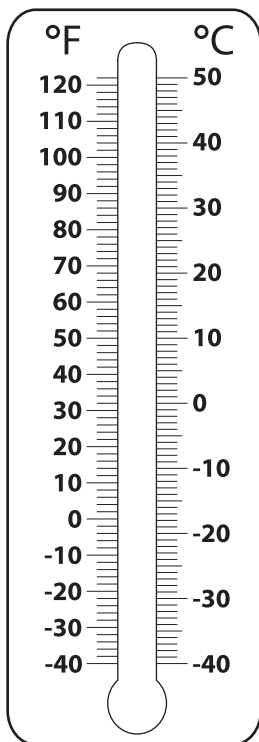


4) 104 °F



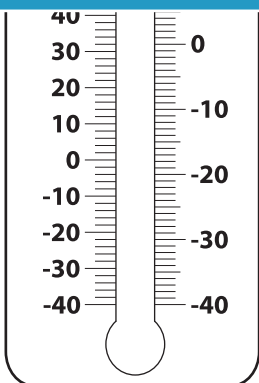
104 °F = _____ °C

5) 41 °F



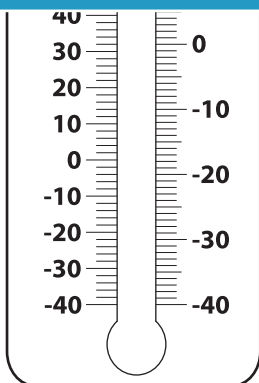
41 °F = _____ °C

6)



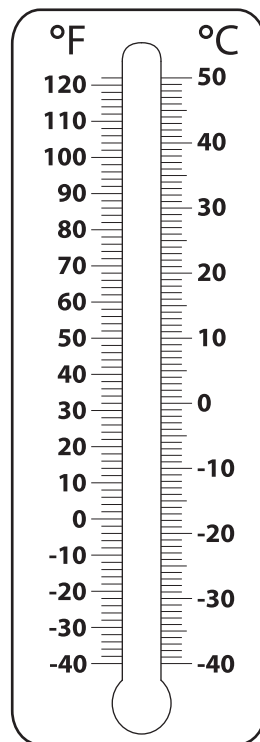
86 °F = _____ °C

Not a member?
Please sign up to
gain complete
access.



-4 °F = _____ °C

8) 95 °F



95 °F = _____ °C

PREVIEW

Gain complete access to the largest
collection of worksheets in all subjects!

Members, please
log in to
download this
worksheet.

www.mathworksheets4kids.com