

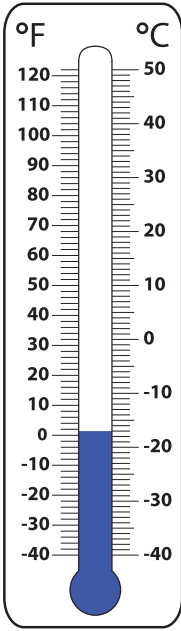
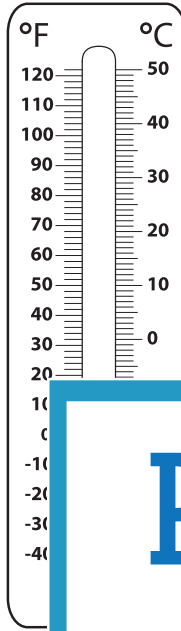
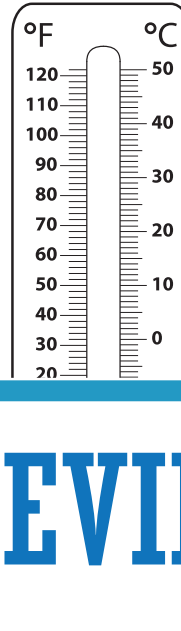
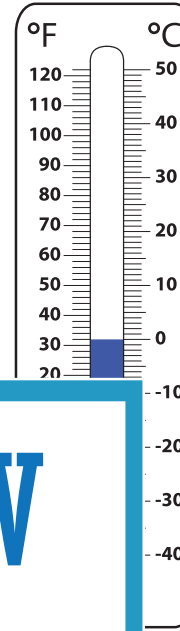
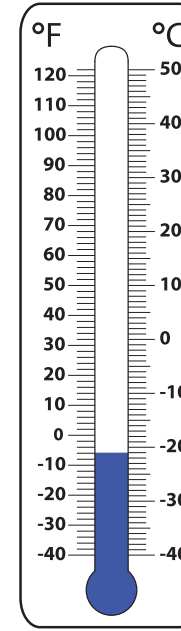
Name : _____

Ordering Temperatures

Coldest to Warmest: S1

Read the thermometers and arrange the temperatures from the coldest to the warmest.

1)

				
<input type="text"/> °C	<input type="text"/> °C	<input type="text"/> °C	<input type="text"/> °C	<input type="text"/> °C

PREVIEW
Gain complete access to the largest collection of worksheets in all subjects!

Members, please log in to download this worksheet.

Not a member? Please sign up to gain complete access.

www.mathworksheets4kids.com

2)

				
<input type="text"/> °F	<input type="text"/> °F	<input type="text"/> °F	<input type="text"/> °F	<input type="text"/> °F