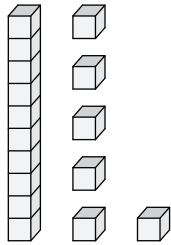
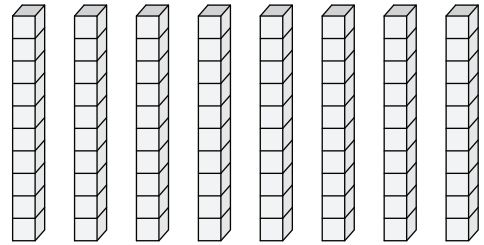


Ten More or Ten Less

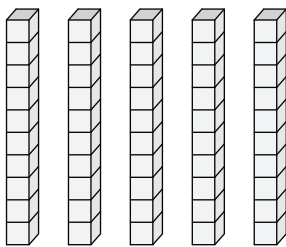
1) What is 10 less than the given set of blocks?



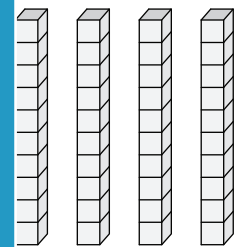
2) What is 10 more than the given set of blocks?



3) What is 10 more than the given set of blocks?



than the given set



PREVIEW


Gain complete access to the largest collection of worksheets in all subjects!

Members, please log in to download this worksheet.

Not a member? Please sign up to gain complete access.

www.mathworksheets4kids.com

5) What is 10 less than the given set of blocks?



e than the given set

