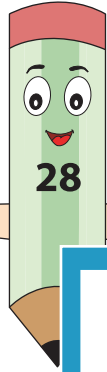


## Ten More or Ten Less

Write the number that is ten more and the number that is ten less than each given number.

1)


10 less



10 more

2)

10 less



10 more

3)

10 less



Gain complete access to the largest collection of worksheets in all subjects!

10 more

Members, please log in to download this worksheet.


Not a member? Please sign up to gain complete access.

[www.mathworksheets4kids.com](http://www.mathworksheets4kids.com)



5)

10 less



10 more

