

Name : _____

Converting from 12-Hour to 24-Hour Clocks

A) Convert each time from 12-hour to 24-hour clock.

1) 2:54 p.m. = _____

2) 6:00 a.m. = _____

3) 5:25 a.m. = _____

4) 3:17 p.m. = _____

5) 12:48 a.m. = _____





6) 10:33 a.m. = _____

7) 7:09 p.m. = _____

8) 1:40 p.m. = _____

B) Read each analog

format.



PREVIEW

Gain complete access to the largest collection of worksheets in all subjects!

Members, please log in to download this worksheet.

Not a member? Please sign up to gain complete access.

www.mathworksheets4kids.com

C) Kelly ate her lunch at 12:40 pm. Write the time in a 24-hour format.
