

Name: _____

Drawing Hands - 5 Minutes

Sheet 3

Draw hands on each clock for the time given below:

1)




Time: 12:50

2)



9:40

3)



4)



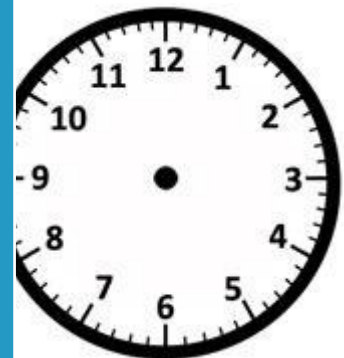
Time: 2:15

PREVIEW
Gain complete access to the largest collection of worksheets in all subjects!

Members, please log in to download this worksheet.


Not a member? Please sign up to gain complete access.

www.mathworksheets4kids.com



1:05

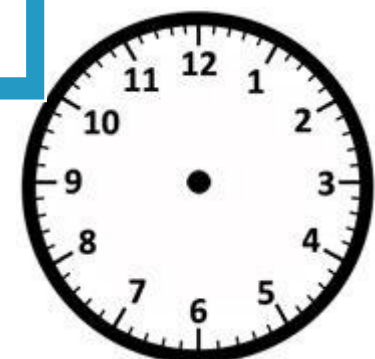
7)



Time: 7:10



Time: 4:15



Time: 11:20