

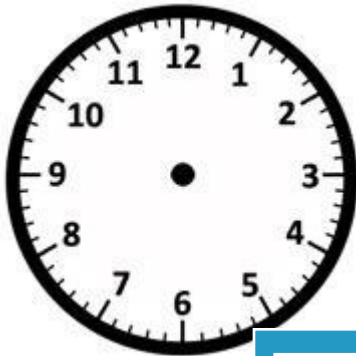
Name: \_\_\_\_\_

**Drawing Hands - Half Hours**

Sheet 1

Draw hands on each clock for the time given below:

1)



Time: 6:00

2)



5:30

3)



4)




Time: 1:30

Gain complete access to the largest collection of worksheets in all subjects!

Members, please log in to download this worksheet.


Not a member? Please sign up to gain complete access.

[www.mathworksheets4kids.com](http://www.mathworksheets4kids.com)



12:30

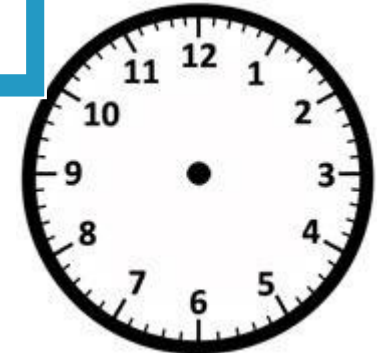
7)



Time: 11:30



Time: 7:30



Time: 3:00