

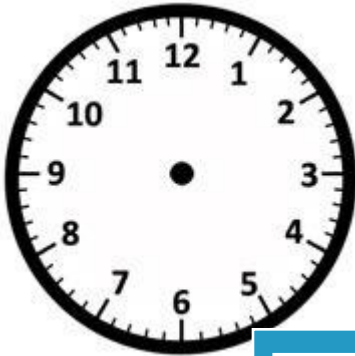
Name: _____

Drawing Hands - Half Hours

Sheet 3

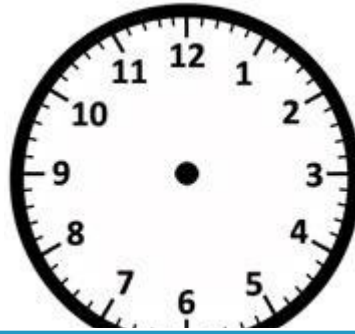
Draw hands on each clock for the time given below:

1)




Time: 2:00

2)



7:30

3)



4)




Time: 11:00

Gain complete access to the largest collection of worksheets in all subjects!

Members, please log in to download this worksheet.


Not a member? Please sign up to gain complete access.

www.mathworksheets4kids.com



6:30


7)



Time: 8:30



Time: 1:30



Time: 4:00