

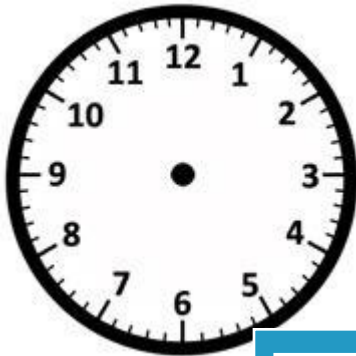
Name: \_\_\_\_\_

**Drawing Hands - Minutes**

Sheet 3

Draw hands on each clock for the time given below:

1)




Time: 7:32

2)



3:38

3)



4)




Time: 12:24

**PREVIEW**  
Gain complete access to the largest collection of worksheets in all subjects!

Members, please log in to download this worksheet.


Not a member? Please sign up to gain complete access.

[www.mathworksheets4kids.com](http://www.mathworksheets4kids.com)



8:07


7)



Time: 10:59



Time: 1:48



Time: 5:15