

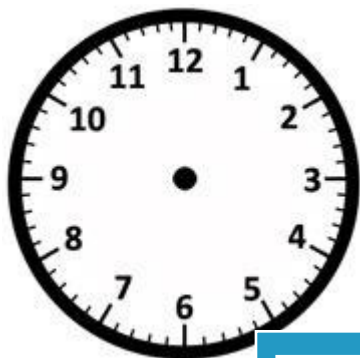
Name: \_\_\_\_\_

**Drawing Hands - Quarters**

Sheet 3

Draw hands on each clock for the time given below:

1)




Time: 7:00

2)



4:15

3)



4)




Time: 2:45

**PREVIEW**  
Gain complete access to the largest collection of worksheets in all subjects!

Members, please log in to download this worksheet.

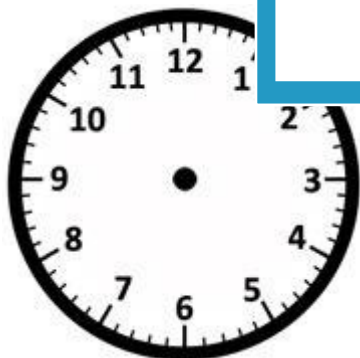
Not a member? Please sign up to gain complete access.

[www.mathworksheets4kids.com](http://www.mathworksheets4kids.com)



12:30

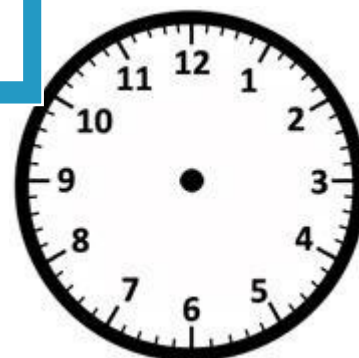
7)



Time: 5:30



Time: 8:45



Time: 10:15