


Name : _____

Telling Time


5 minutes: S1

A) Read each clock, and write the time.

1)





2)



3)

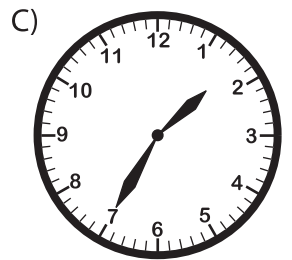


4)



B) Choose the clock

Time : 12:35



C) Choose the correct time shown by the clock.



A)

4:50

B)

10:20

C)

3:50

PREVIEW

Gain complete access to the largest collection of worksheets in all subjects!

Members, please log in to download this worksheet.

Not a member? Please sign up to gain complete access.

www.mathworksheets4kids.com